
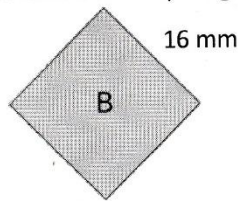


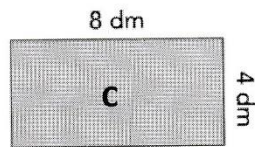
⇒ **Exercice 1** : Calcule le périmètre de chaque figure.



5 cm

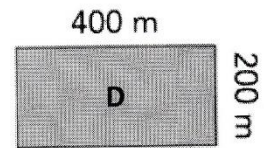


16 mm



8 dm

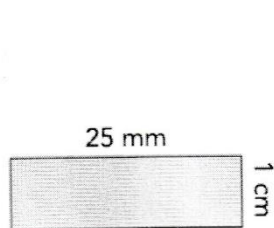
4 dm



400 m


200 m

⇒ **Exercice 2** : Calcule le périmètre de chaque figure.



25 mm

1 cm




80 dm

25 m



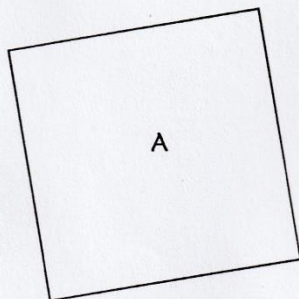
17 cm

9 cm

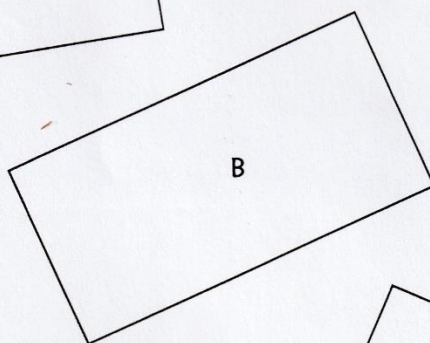


75 dm


2 - Sur ton cahier, calcule le périmètre des carrés et des rectangles suivants, en utilisant la formule. [4 réponses]



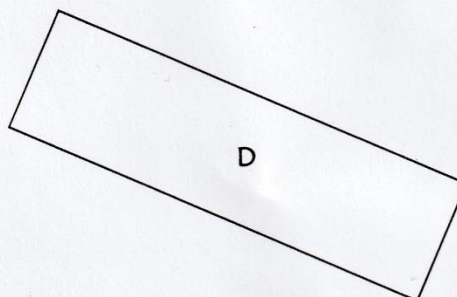
A



B



C



D